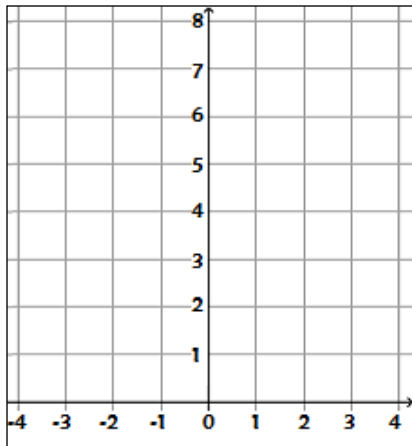


Alumno: _____

Realiza un bosquejo del gráfico de las siguientes funciones, para ello se sugiere completar la tabla de valores.

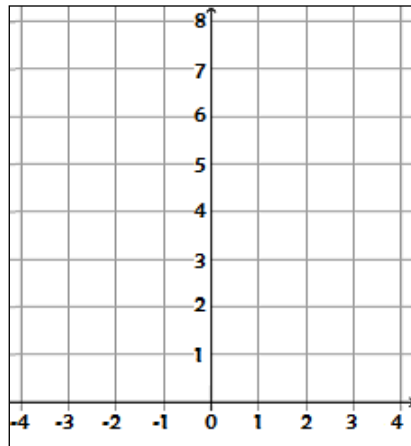
$$f(x) = (4/3)^x$$

x	f(x)
-3	
-2	
-1	
0	
1	
2	
3	



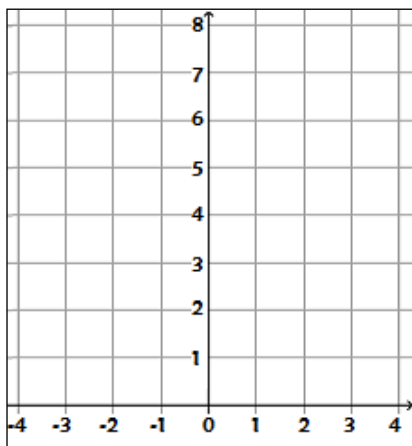
$$f(x) = (3/2)^x$$

x	f(x)
-3	
-2	
-1	
0	
1	
2	
3	



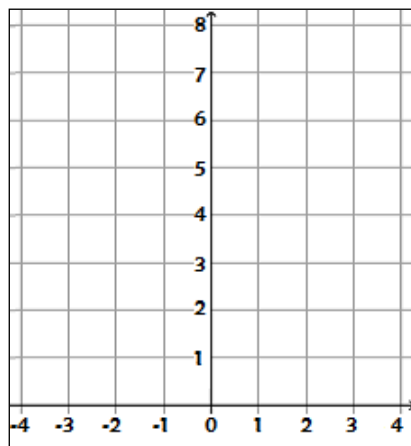
$$f(x) = (3/4)^x$$

x	f(x)
-3	
-2	
-1	
0	
1	
2	
3	



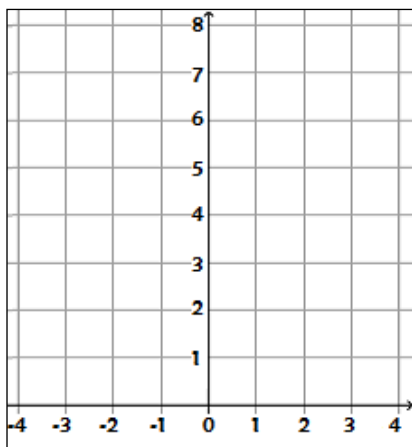
$$f(x) = (2/3)^x$$

x	f(x)
-3	
-2	
-1	
0	
1	
2	
3	



$$f(x) = (1/2)^x$$

x	f(x)
-3	
-2	
-1	
0	
1	
2	
3	



$$f(x) = 1^x$$

x	f(x)
-3	
-2	
-1	
0	
1	
2	
3	

